

Number Patterns

Lesson 5

In Focus


1	2	3	4	5	6	7	8	9	10
11	12	13	14	15	16	17	18	19	20
21	22	23	24	25	26	27	28	29	30
31	32	33	34	35	36	37	38	39	40
41	42	43	44	45	46	47	48	49	50
51	52	53	54	55	56	57	58	59	60
61	62	63	64	65	66	67	68	69	70
71	72	73	74	75	76	77	78	79	80
81	82	83	84	85	86	87	88	89	90
91	92	93	94	95	96	97	98	99	100


This is a one hundred chart.


Look at the numbers in the yellow boxes.
What number patterns do you see?

Guided Practice

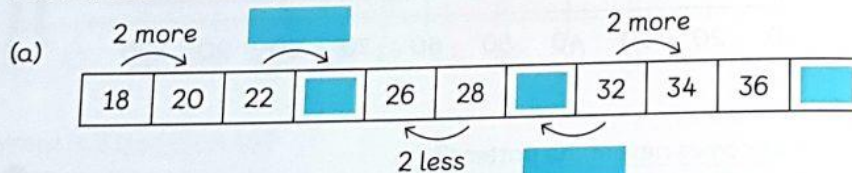
1 Complete the number patterns.

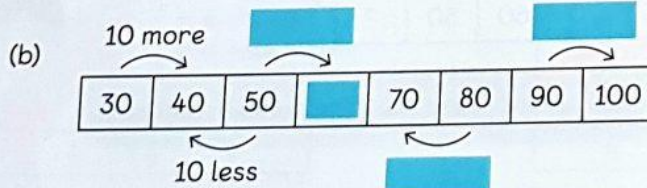
(a) 

(b) 

(c) 

2 Look at each number pattern and complete it.

(a) 

(b) 

(c) 90, 80, 70, 60, , 40,
Each number is less than the number before it.

(d) , , 50, 60, 70, 80, 90
Each number is 10 than the number before it.