

Thursday 25th June

PE with Joe – <https://www.youtube.com/user/thebodycoach1>

Cosmic yoga – <https://www.youtube.com/user/CosmicKidsYoga/videos>

Speed sound session – The children are very familiar with the RWI routines. Play the video for your set and you will see, they know what to do!

Set 1 – https://www.youtube.com/channel/UCo7fbLgY2oA_cFCIg9GdxtQ

Set 2 – ow

Speed sound session: <https://youtu.be/HzqroSzx93A>

Fred finger and hold a sentence: <https://youtu.be/gxQz2C5H-ZE>

Set 3 – ure

Speed sound session: https://youtu.be/gm-nVwf9_18

Fred finger and hold a sentence: <https://youtu.be/bPzcKT9kHQ0>

Maths: **See below**

Watch this video on White Rose <https://whiterosemaths.com/homelearning/year-2/>

Reading - Read one of your favourite books to you parent/carer. If you have ran out of books, log on to your myon.co.uk and find a book from there! Ask your teacher on class dojo if you aren't sure of your username or password.

English – Plan your own non-fiction text **See below**

Story time – Little mouse's big bad breakfast <https://youtu.be/P7rhyTqc4W0>

Topic- D&T –Use your knowledge of materials and Brunel and design your own bridge. **See below**


Thursday 25th June

English


Now it's time for you to plan your own Non – Fiction Text.

Using the templates on the next page create your own Non-Fiction text using your plan you did yesterday. See the next sheet for a template.

Thursday 25th June





Seven vertical lines of equal length, spaced evenly across the right side of the page, serving as a guide for writing.



Seven vertical lines of equal length, spaced evenly across the right side of the page, serving as a guide for writing.

Thursday 25th June



Thursday 25th June

Date	25.06.20
Subject/s	Maths
L.O	To use the 2 times table



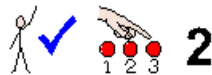
I can use drawings to represent multiplication problems



I can write multiplication sentences



I can count in 2s



Pre-task – To use the 2 times table



How many

eyes

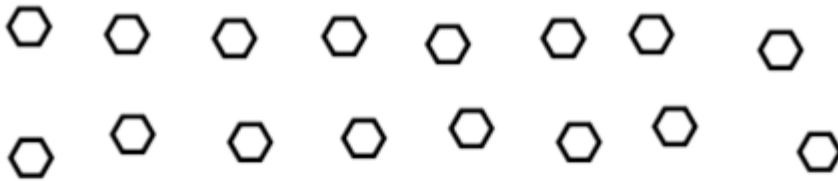
do

8

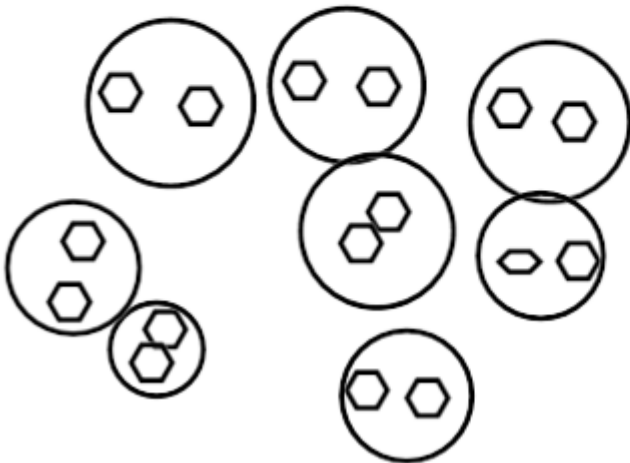
people

have?

Use drawings to help you



$$8 \times 2 = 16$$



Fluency 1 *Draw a picture and write a number sentence to show your answer:*

How many ears will 6 children have?

If there are 7 bikes. How many wheels are there?



How many legs will 5 birds have?



How many socks will 4 children have?



I have five 2ps in my purse.

How much do I have?

How many hands will 10 children have?



Mastery Challenge



I have 10p in 2p coins.

How many 2ps do I have?

tents

in each tent

people in total



Reasoning and Problem solving

I have 10p in 2p coins.

How many 2ps do I have?

Fill in the missing boxes.



$$3 \times \square = 6$$

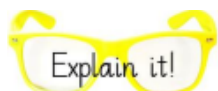
$$\square \times 2 = 20$$

$$7 \times 2 = \square$$

Thomas says that $10 \times 2 = 22$

Is he correct?

Explain how you know.



Thursday 25th June



tents



in each tent



people in total



Further Challenge



Ben buys 6 toy cars for £2 each and 3 books for £3 each.

How much does he spend altogether?

If he pays with a £20 note, how much change will he get?

Further Challenge



All numbers in the 2x table are even.

Thursday 25th June

Topic- D&T -Use your knowledge of materials and Brunel and design your own bridge.

Name: _____

Design a bridge

Draw your bridge here:

Materials I am going to use and why

1. _____

2. _____

3. _____

My bridge is suitable for which transport?