

## Wednesday 20<sup>th</sup> May

**PE with Joe** – <https://www.youtube.com/user/thebodycoach1>

### **Speed sound session** –

The children are very familiar with the RWI routines. Play the video for your set and you will see, they know what to do!

Set 1 - [https://www.youtube.com/channel/UCo7fbLgY2oA\\_cFCIg9GdxtQ](https://www.youtube.com/channel/UCo7fbLgY2oA_cFCIg9GdxtQ)

Set 2 – air - <https://youtu.be/QqqniQEpodM>

Set 3 – ow - <https://youtu.be/zSa9QNr7Des>

### **Maths**

Have a go at completing the maths sheets from White Rose – **See below**

### **Reading**

Read one of your favourite books to you parent/carer. If you have ran out of books, log on to your myon.co.uk and find a book from there!

### **English**

Have a go at the exploring words together activity. – **See Talk for Writing Booklet**

### **Story time – Lost and Found**

<https://youtu.be/9w2iLNv8uFO>

### **Topic: History**

Take a look on this virtual tour around the National History Museum. Can you see any facts about dinosaurs? [https://artsandculture.google.com/streetview/the-natural-history-museum-hintze-hall/yQHjHCmSOMKyhQ?sv\\_lng=-0.1776099623741629&sv\\_lat=51.49657065049949&sv\\_h=-26.360562236836376&sv\\_p=-3.1649272313600725&sv\\_pid=qXTapR8σ\\_hWOC\\_PEtNpYUw&sv\\_z=1.0151362586254875](https://artsandculture.google.com/streetview/the-natural-history-museum-hintze-hall/yQHjHCmSOMKyhQ?sv_lng=-0.1776099623741629&sv_lat=51.49657065049949&sv_h=-26.360562236836376&sv_p=-3.1649272313600725&sv_pid=qXTapR8σ_hWOC_PEtNpYUw&sv_z=1.0151362586254875)

Add equal groups



1 Complete the sentences.



There are  apples in each bag.

There are  bags.

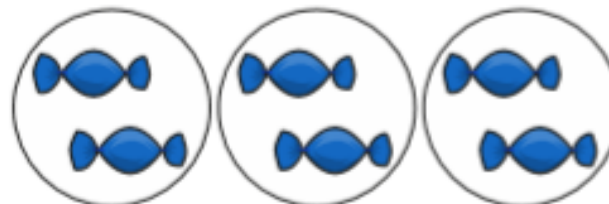
There are  equal groups of

There are  apples altogether.

$$\square + \square + \square + \square = \square$$




2 How many sweets are there?



$$\square + \square + \square = \square$$

There are  sweets.

3 How many marbles are there?

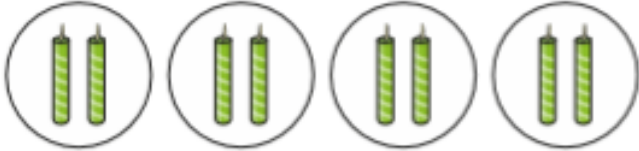


$$\square + \square + \square = \square$$

There are  marbles.



4 How many candles are there?



$$\square + \square + \square + \square = \square$$

There are  candles.

5 Use counters to show the equal groups.

Complete the number sentences.

a)  $2 + 2 + 2 + 2 = \square$

b)  $5 + 5 + 5 + 5 + 5 = \square$

6 There are 7 equal groups of 5 counters.

How many counters are there altogether?

There are  counters altogether.

