




Miss Gilder and Miss Marley have bought some grapes for a snack. But they don't know how to share the grapes so that it is fair. Can you help them?




Half of 4 is _____



Half of 6 is _____



Half of 8 is _____



Half of 10 is _____