

Thursday 2nd July

PE with Joe – <https://www.youtube.com/user/thebodycoach1>

Speed sound session

The children are very familiar with the RWI routines. Play the videos for your set and you will see, they know what to do! We have now included a Fred Fingers and hold a sentence session in order to give the children a further writing opportunity.

Set 1 – https://www.youtube.com/channel/UCo7fbLgY2oA_cFCIg9GdxtQ

Set 2 – oy – <https://youtu.be/OHQKt0MuFnc>

<https://youtu.be/HWWy5ChsV-Y>

Set 3 – u-e- <https://youtu.be/ynK65vpKDkw>

<https://youtu.be/IHqu4iCAnik>

Maths

Number bonds to 10 / 20 – **see below**.

Reading


Read one of your favourite books to you parent/carer. If you have ran out of books, log on to your myon.co.uk and find a book from there!

English

Today we are going to learn about rhyme. Can you match the words that rhyme? Then can you think of other words that rhyme with the given words? – **see below**.

Story time

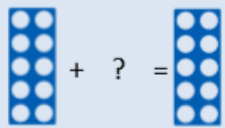
<https://youtu.be/q-LjS7Y38cl>

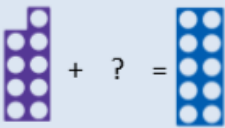


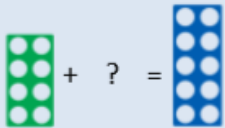
Design Technology

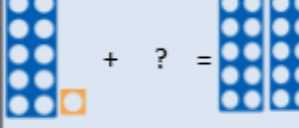
Using what you have learnt about making structures stronger, see if you can make a stronger bridge. Test it out by seeing how many pennies it can hold this time. Was it more than last week?

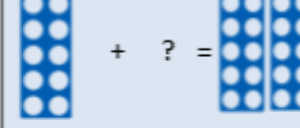
Thursday 2nd July - Maths Number bonds to 10 and 20

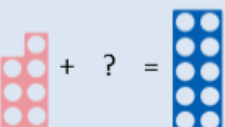

 $10 + \square = 10$

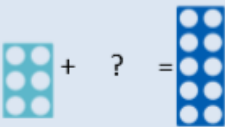

 $9 + \square = 10$

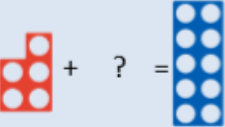

 $8 + \square = 10$

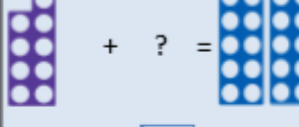

 $11 + \square = 20$

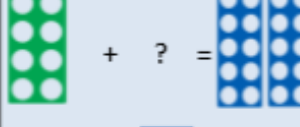

 $10 + \square = 20$

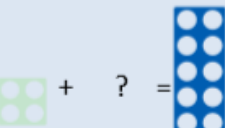

 $7 + \square = 10$

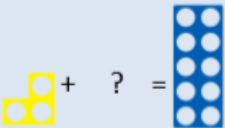

 $6 + \square = 10$

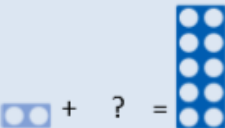

 $5 + \square = 10$

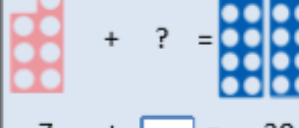

 $9 + \square = 20$

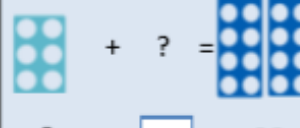

 $8 + \square = 20$

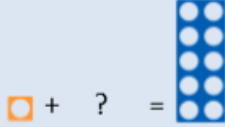

 $4 + \square = 10$

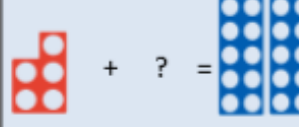

 $3 + \square = 10$

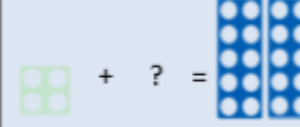

 $2 + \square = 10$



 $7 + \square = 20$



 $6 + \square = 20$



 $1 + \square = 10$



 $5 + \square = 20$


 $4 + \square = 20$


 $3 + \square = 20$


 $2 + \square = 20$


 $1 + \square = 20$


 $20 + \square = 20$

Now you could practice : <https://www.topmarks.co.uk/maths-games/hit-the-button>



Thursday 2nd July – Writing Activity











Today we are going to look at rhyme.

Can you draw a line to join the rhyming words together?

Don't forget:



Now, see how many words you can think of to rhyme with these words:

 car	 house
 cat	 box
 frog	 bat
 mouse	 star
 fox	 dog

gate	help	flying	now
1.	1.	1.	1.
2.	2.	2.	2.
3.	3.	3.	3.

Can you think of a sentence to rhyme with these sentences?

I can hear the princess screaming for help,

I can see the dragon,

