

What is at these coordinates on the pirate map?

(I,4) = _____


(A,1) = _____


(E,3) = _____


(F,2) = _____


(G,4) = _____


Write the coordinate of these places on the pirate map:

 = (,)

 = (,)

 = (,)

 = (,)

 = (,)

Plot these coordinates on the grid using a cross.

(B,1)

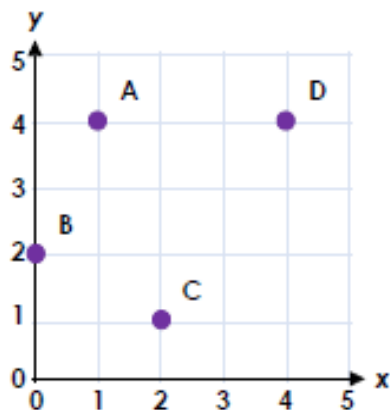
(C,4)

(E,2)

(I,1)

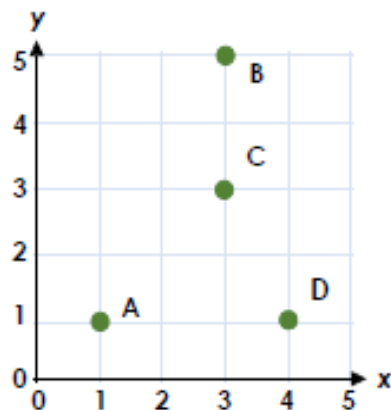
(G,3)

Are the coordinates of each point correct?



A = (4, 1) B = (0, 2)
C = (2, 1) D = (4, 3)

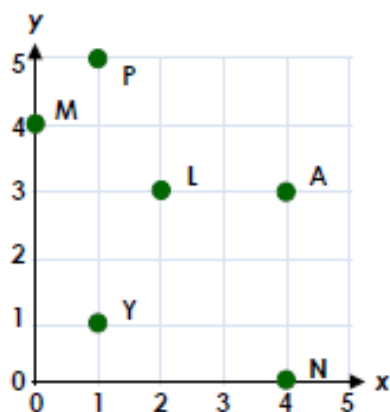
Are the coordinates of each point correct?



A = (1, 1) B = (5, 3)
C = (3, 4) D = (4, 1)

Find the coordinates in order. What word do the letters spell?

(0, 4) (4, 3) (4, 0) (1, 1)



Find the coordinates in order. What word do the letters spell?

(4, 2) (2, 2) (4, 5) (1, 0)

