

**Steps to Success**

Lockdown	
Date	Thursday 14 <sup>th</sup> January
Subject/s	Geography
Learning Objective	To identify the polar regions



SA	TA

Success Criteria 	I can identify the polar regions using an atlas.		
	I can identify the countries and oceans that surround the Antarctic / Arctic.		
	I can use latitude and longitude to locate places		
Support	Independent	Adult Support ( )	Group Work

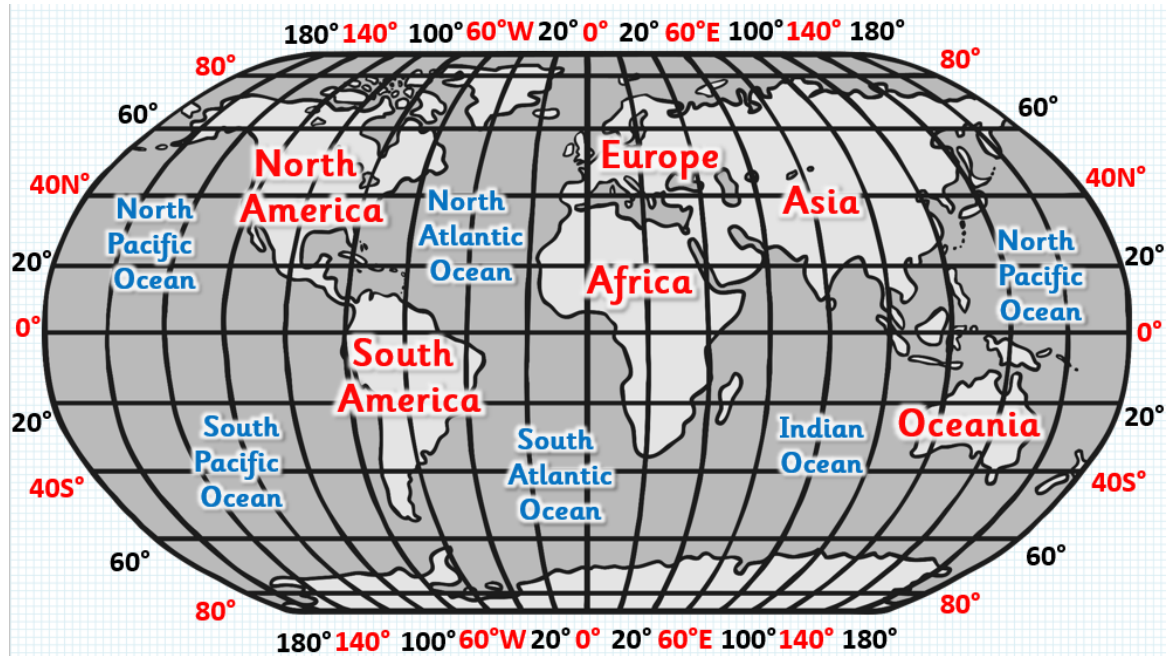
**Key vocabulary for the lesson:**

Northern hemisphere    Southern hemisphere    equator    Tropic of Cancer  
 Tropic of Capricorn    latitude    longitude

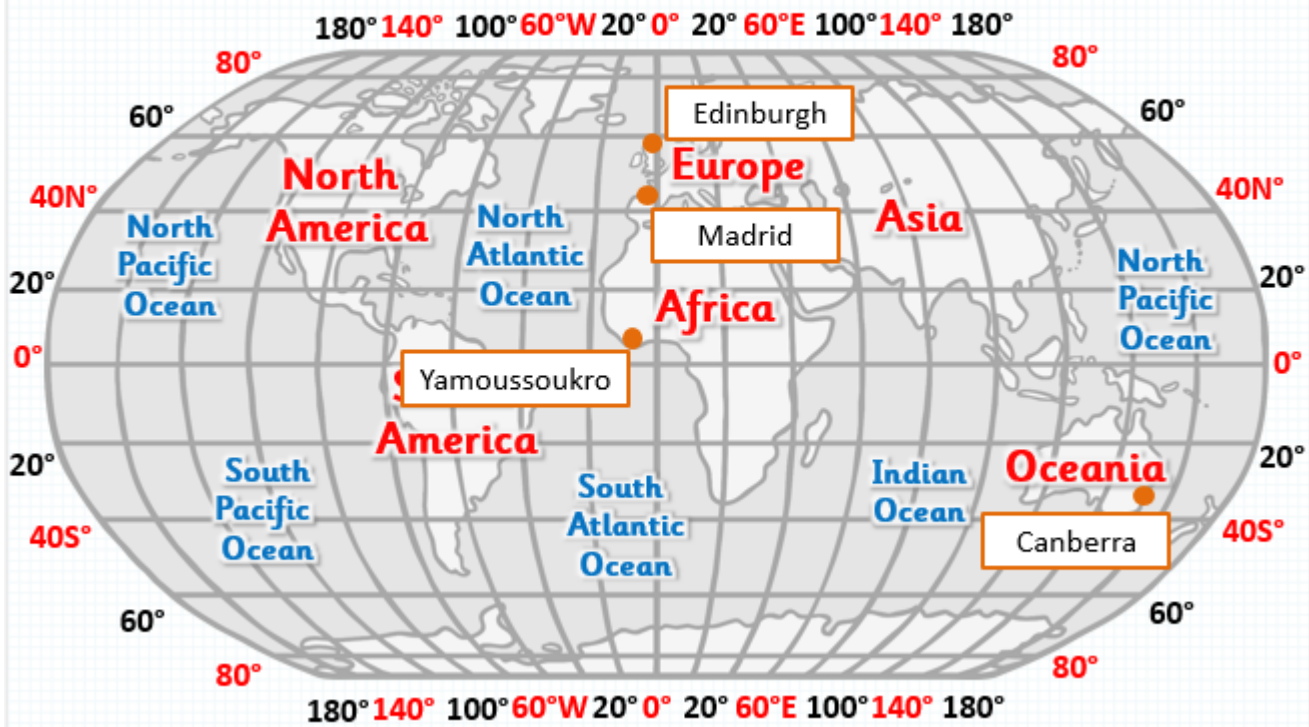
### Task 1

Using the map below:

- Plot these countries on the map using their latitude and longitude
- Edinburgh - 55° 57' N 03° 17' W
- Canberra - 35° 15' S 149° 8' E
- Yamoussoukro - 6° 49' N 5° 17' W
- Madrid - 40°25'N 03°45'W



# The World Answers

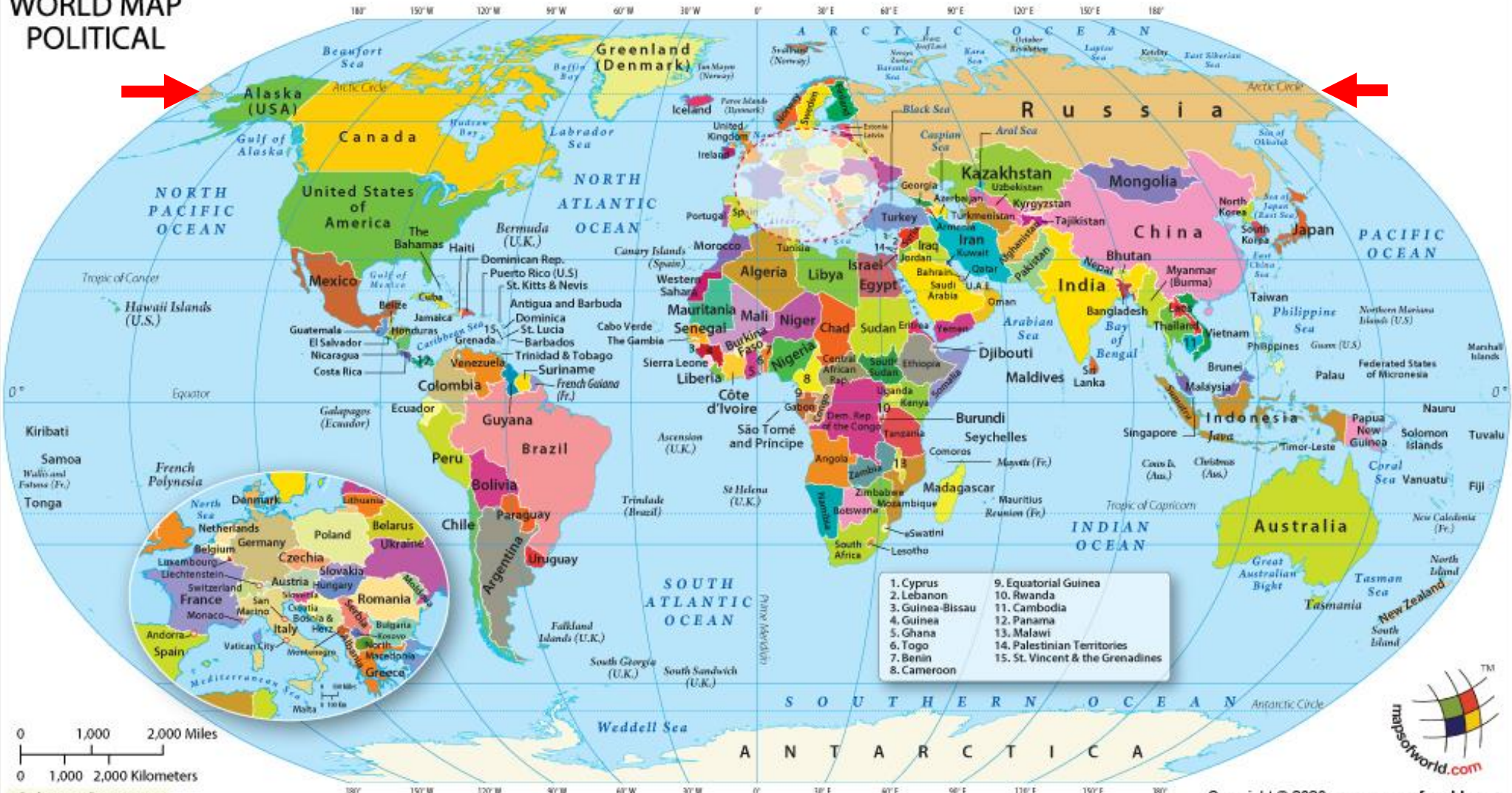


## Task 2

Use the world map to find the 8 countries inside the arctic circle. Label them on the blank map

Challenge – find their latitude and longitude

# WORLD MAP POLITICAL



- |                  |                                  |
|------------------|----------------------------------|
| 1. Cyprus        | 9. Equatorial Guinea             |
| 2. Lebanon       | 10. Rwanda                       |
| 3. Guinea-Bissau | 11. Cambodia                     |
| 4. Guinea        | 12. Panama                       |
| 5. Ghana         | 13. Malawi                       |
| 6. Togo          | 14. Palestinian Territories      |
| 7. Benin         | 15. St. Vincent & the Grenadines |
| 8. Cameroon      |                                  |



Copyright © 2020 www.mapsofworld.com

