

### Place Value

Which symbol completes this number sentence?

$$7\ 341\ 090 \quad \square \quad 7\ 743\ 190$$

× and ÷

Use a written method to solve this calculation:

$$7008 \div 96 = \square$$

### Four Operations

$$6^2 \div (7 + 2) = \square$$

$$70\% \text{ of } 480 = \square$$

### Problem Solving

Identify the square numbers:

35, 49, 50, 88, 100, 9

### Reasoning



In 120 minutes, the time will be ten to five in the afternoon.




Is Alison correct?  
Explain your reasoning.

If I count on a number line from -11 to 9, the difference will be 21.



Is Henry correct?  
Explain your reasoning.

 Menu

**Place Value**

Which symbol completes this number sentence?

7 341 090  7 743 190

**Four Operations**

$6^2 \div (7 + 2) =$

70% of 480 =

**× and ÷**

Use a written method to solve this calculation:

$7008 \div 96 =$


**Problem Solving**

Identify the square numbers:

35, 49, 50, 88, 100, 9


9, 49, 100

**Reasoning**



In 120 minutes, the time will be ten to five in the afternoon.

Is Alison correct?  
Explain your reasoning.



If I count on a number line from -11 to 9, the difference will be 21.

Is Henry correct?  
Explain your reasoning.

