





**Steps to Success**

Date	Thursday 07 <sup>th</sup> January 2021
Subject/s	Geography
Learning Objective 	To locate places on a world map

		SA 	TA 
Success Criteria 	I can identify continents and oceans		
	I can identify the equator and the tropics of cancer and Capricorn		
	I can use an atlas to locate places on a world map		
Support	Independent	Adult Support ( )	Group Work
<b>Lockdown learning</b>			
<b>Key vocabulary for the lesson:</b>			
atlas      continent      ocean      Northern hemisphere      Southern hemisphere      equator			
Tropic of Cancer      Tropic of Capricorn			

1) First, scroll down to the map that says 'Cold task'. You need to label the continents and the oceans.

Continents:	Europe	Asia	Africa
South America	North America	Australia	Antarctica

Oceans:	Pacific Ocean	Southern Ocean
Indian Ocean	Arctic Ocean	Atlantic Ocean

- 2) Once you've had a try at that, watch this video that explains where the oceans and the continents are. <https://www.youtube.com/watch?v=VGxssWl99U8>
- 3) Look at the Atlas on the next page. Can you use it to label the continents and oceans correctly on the map.
- 4) Label the equator.
- 5) Label the tropic of Cancer.
- 6) Label the tropic of Capricorn.

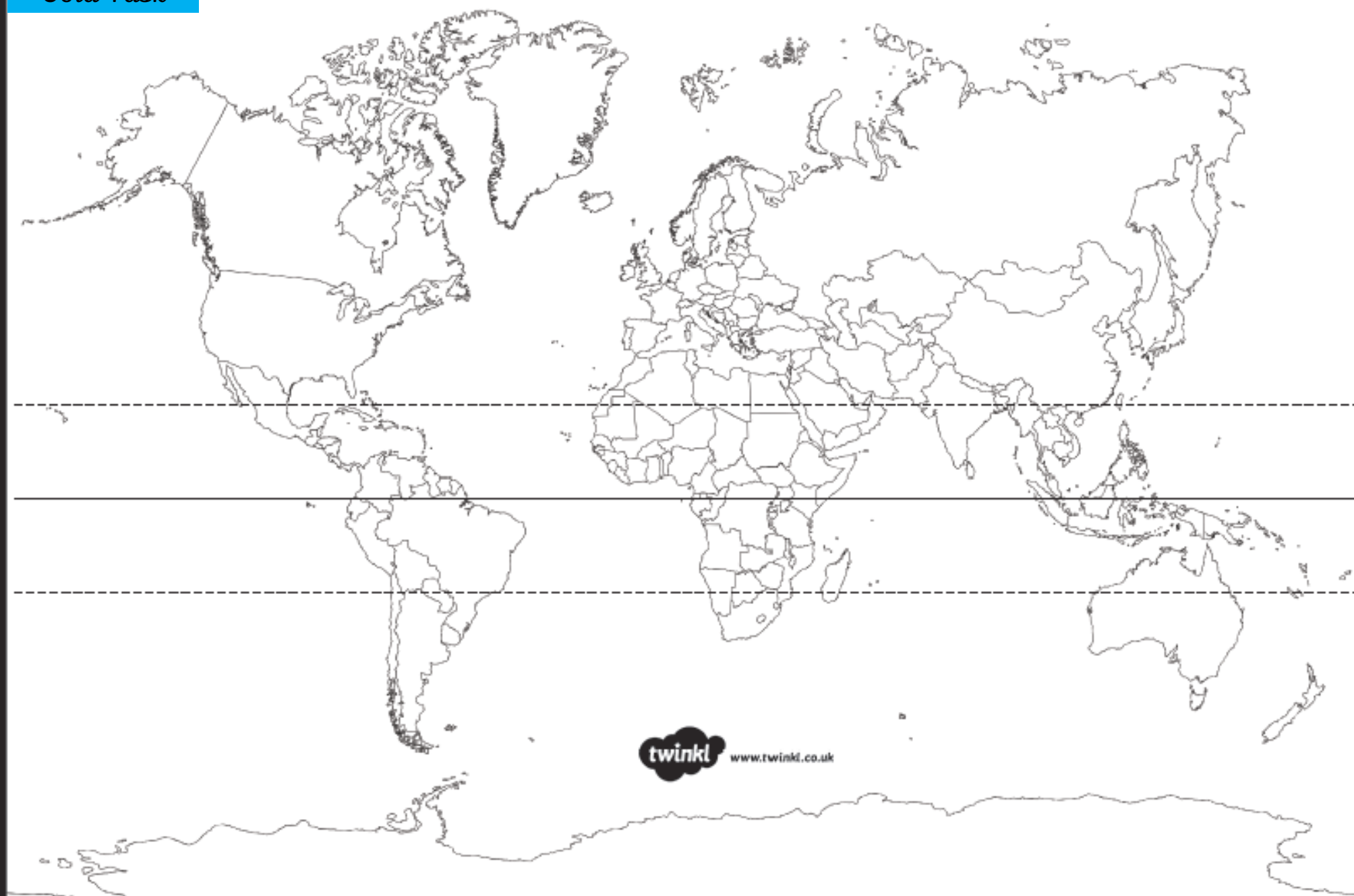
Once you have done that, research what these lines are and what they mean.

<https://kids.britannica.com/kids/article/tropics/400195#:~:text=The%20line%20called%20the%20Tropic,Capricorn%20marks%20the%20southern%20edge.&text=The%20tropics%20are%20the%20only,Sun%20sometimes%20shines%20straight%20down.>

Which countries are in the tropics? What does that mean about their weather?

I will be putting the correctly labelled map on Class Dojo at 3:00pm so you can check if you were right!  
Well done 😊

Cold Task



Independent

