















Home learning

Wednesday 10th February 2021

Timetable for your day

 Wake up Activity	 RWI	 SPaG	 play break	 maths	 play break	 Topic	 story	 finished
-------------------------------------------------------------------------------------------------------	------------------------------------------------------------------------------------------	-------------------------------------------------------------------------------------------	-------------------------------------------------------------------------------------------------	----------------------------------------------------------------------------------------------	---------------------------------------------------------------------------------------------------	----------------------------------------------------------------------------------------------	----------------------------------------------------------------------------------------------	-------------------------------------------------------------------------------------------------

 Wake up Activity	<p>Pick an activity to help wake yourself up and get ready for the day PE with Joe – https://www.youtube.com/user/thebodycoach1</p> <p>Cosmic yoga – https://www.youtube.com/user/CosmicKidsYoga/videos</p> <div style="display: flex; justify-content: space-around; align-items: center;"> <div style="text-align: center;">  The Body Coach TV <small>2.62M subscribers</small> SUBSCRIBE </div> <div style="text-align: center;">  Cosmic Kids Yoga <small>1.03M subscribers</small> SUBSCRIBED </div> </div>															
 RWI   SPaG	<p>Play the video for your set and you will see, they know what to do!</p> <table border="1" style="width: 100%; text-align: center;"> <thead> <tr> <th style="width: 33%;">Set 1</th> <th style="width: 33%;">Set 2</th> <th style="width: 33%;">Set 3</th> </tr> </thead> <tbody> <tr> <td style="font-size: 2em;">sh</td> <td style="font-size: 2em;">ee</td> <td style="font-size: 2em;">ur</td> </tr> <tr> <td></td> <td></td> <td></td> </tr> <tr> <td>https://youtu.be/RzBiOuc-aLU</td> <td>https://youtu.be/-anCt1oZ_KO</td> <td>https://youtu.be/bXRLCs789VQ</td> </tr> <tr> <td></td> <td>Fred Fingers and Hold a sentence https://youtu.be/QfeX0ivGrXc</td> <td>Fred Fingers and Hold a sentence https://youtu.be/TaL2O4OHAyc</td> </tr> </tbody> </table> <p>SPaG – See sheets below</p>	Set 1	Set 2	Set 3	sh	ee	ur				https://youtu.be/RzBiOuc-aLU	https://youtu.be/-anCt1oZ_KO	https://youtu.be/bXRLCs789VQ		Fred Fingers and Hold a sentence https://youtu.be/QfeX0ivGrXc	Fred Fingers and Hold a sentence https://youtu.be/TaL2O4OHAyc
Set 1	Set 2	Set 3														
sh	ee	ur														
																
https://youtu.be/RzBiOuc-aLU	https://youtu.be/-anCt1oZ_KO	https://youtu.be/bXRLCs789VQ														
	Fred Fingers and Hold a sentence https://youtu.be/QfeX0ivGrXc	Fred Fingers and Hold a sentence https://youtu.be/TaL2O4OHAyc														

Have a break and play

Maths	<i>See sheets below</i>
-------	-------------------------

Have a break and play

Topic	<i>See sheets below</i>
-------	-------------------------

Story time	<p>Reading – Read one of your favourite books to you parent/carer. If you have ran out of books, log on to your my.on.co.uk and find a book from there! Ask your teacher on class dojo if you aren't sure of your username or password.</p> <p>Story time -</p>
------------	-------------------------------------------------------------------------------------------------------------------------------------------------------------------------------------------------------------------------------------------------------------------------------

Hope you had a lovely day 😊



RWI

RWI

Set 1 sounds

Day 3



Practise handwriting

Slither down the snake, down the head to the hooves and over his back

sh sh sh

Practise sound-writing

sh

Have a read of the words in this book.

<https://www.oxfordowl.co.uk/api/interactives/30664.html>

A Pet Goldfish

Day 3


A pet
goldfish

Non-fiction

Set 2 Book 3

a e i o u

Text by Gill Munton
Series developed by Ruth Miskin



OXFORD

Read the story -

<https://www.oxfordowl.co.uk/api/interactives/29263.html>

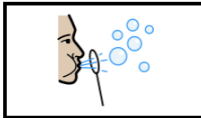
Proof read

Find and fix the 4 mistakes in this sentence.

drop fish food in th tanc

Build a sentence

Write about fish. What can fish do?




Fish can

Fish can

Save the whale

Day 3



Read the story

<https://www.oxfordowl.co.uk/api/interactives/29254.html>

Hold a sentence 2.

The humpback whale is a mammal.

Grammar

Underline the verb in each sentence below.

1. It us hunted and killed by man
2. Fishing takes away its food
3. It gets stuck in fishing nets
4. It bumps into ships

Vocabulary.

Read the words in the box

sea	drift	horse	weed
sun	wood	side	hat

Match pairs of word together to make new words. For example – Seahorse

Wednesday 10th February

LO: To use comparative and superlative adjectives.

Success Criteria:

- I can add the suffix er.
- I can add the suffix est.
- I can use comparative and superlative adjectives correctly in a sentence. .

Comparative adjectives are used when you are comparing one thing with another.

Superlative adjectives are used when you are comparing more than two things.




Batman is _____ than Iron Man.







Elsa is the _____ Princess ever.



Hulk is _____ than Superman.



Dinosaurs are the _____ creatures.

Date	Wednesday 10 th February		
Subject/s	SPaG		
Learning Objective 	To use comparative and superlative adjectives.		
			
Success Criteria 	I can add the suffix 'er'.		
	I can add the suffix 'est'.		
	I can use comparative and superlative adjectives correctly in a sentence.		
Support	Independent	Adult Support	Groups

Someone has removed all of the adjectives from these sentences! Can you help to complete the sentences by choosing the correct adjective?

1. My cat is _____ than your cat.
friendly friendlier friendliest

2. Cameron is _____ than Josh.
short shorter shortest

3. The Blue whale is the _____ animal in the world.
large larger largest




Challenge

Can you think of your own adjectives?

Francis has the _____ skin.

An elephant's feet are _____ than mine.

The lion is the _____ animal.

Date	Wednesday 10 th February		
Subject/s	SPaG – Reading comprehension		
Learning Objective	To answer questions based on what has been read.		
			
Success Criteria 	I can read the question.		
	I underline the answer in the text.		
	I can write my answer in full sentences.		
Support	Independent	Adult Support	Groups



- R** 1. Why was Trindela making the potion?
2. How many hairs **should** go in the potion?
3. How many hairs **did** Trindela put in the potion?
4. What was the strange effect of the potion?
5. What did the pigeons have too do?
6. What happened to the people when they touched the bubbles?

$$2 + 3 = 5$$

Maths- To interpret pictograms



10.02.2021

$3 + 6 =$

$10 - \square = 4$

$62 - 10 - 10 =$

$9 + 9 + 7 =$

$48 + 25 =$

$100 - 42 - \square = 48$

$19 - 9 = \square$

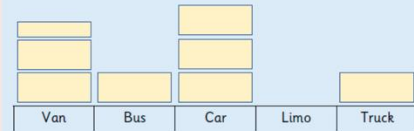
$10 + 40 + 20 = \square$



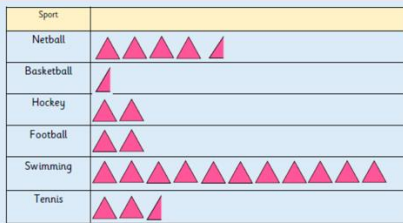
sphere

edges _____
faces/surfaces _____
vertices _____

= 10 vehicles



How many more cars were seen than buses?
What is the total number of vehicles?



Which is the most popular sport?
How many children voted for hockey and swimming altogether?

▲ = 2

Use the pictogram to decide if the statements are true or false.

Animal	Number on the farm
Cow	☆☆☆☆
Pig	☆☆☆
Horse	☆☆☆☆☆☆
Sheep	☆☆☆☆
Goat	☆☆☆☆

☆ = 10 animals

Statement	True or False?
Pigs were the least popular animal.	
Cows were the most popular animal.	
The number of sheep seen was half the number of horses seen.	
The total amount of pigs and cows seen is 65.	
There were 5 fewer goats than sheep.	
There were 8 cows on the farm.	



The pictogram is correct.

○ = 2 people

Favourite Sports	Pictogram	Total
Football	○ ○ ○ ○	4
Rugby	○ ○ ○ ○ ○	5
Gymnastics	○ ○	2
Swimming	○ ○ ○	3

Fluency 1

Birds spotted in the park



- How many blackbirds and robins were spotted in **total**?
- How many **more** sparrows were seen than robins?
- How many birds were seen in **total**?

Fluency 2

Dora, Dexter and Jack play basketball at break time.

They record the goals they score in a pictogram.

Name	Goals
Dora	● ●
Dexter	● ● ● ● ● ● ● ●
Jack	● ● ● ● ● ● ● ● ● ●

Key
● = 2 goals

a) Complete the sentences.


Dora scores goals.





Dexter scores goals.

Jack scores goals.

b) How many goals do they score altogether?

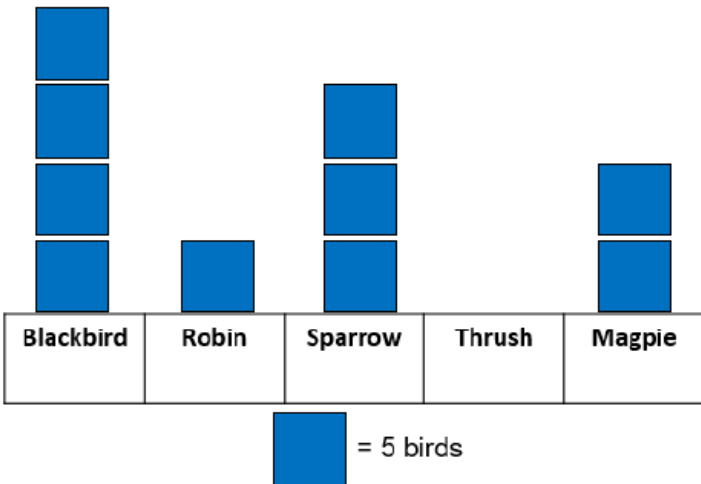
c) How many more goals does Jack score than Dexter?

Date	10.02.2021
Subject/s	Maths
L.O 	To interpret pictograms (2, 5 and 10)


Success criteria  	I can add up the totals in pictograms		
	I know 'find the difference' and 'how many more' means to subtract		
	I can find the difference		
Support	Independent	Adult Support	Group

Fluency 1

Birds spotted in the park






Blackbird	Robin	Sparrow	Thrush	Magpie
-----------	-------	---------	--------	--------


 = 5 birds

1. How many blackbirds and robins were spotted in **total**?
2. **How many more** sparrows were seen than robins?
3. How many birds were seen in **total**?

Fluency 2

Dora, Dexter and Jack play basketball at break time.
They record the goals they score in a pictogram.

Name	Goals
Dora	
Dexter	
Jack	

Key
 = 2 goals

a) Complete the sentences.

Dora scores goals.

Dexter scores goals.

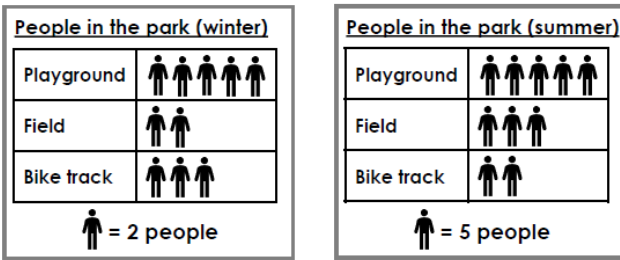
Jack scores goals.

b) How many goals do they score altogether?

c) How many more goals does Jack score than Dexter?

Reasoning and Problem solving


Spot the difference



Explain what these pictograms show.



Ice creams sold in a week



Convince me

On Sunday the most ice creams were sold.



True or False (Why?)

Three ice creams were sold on Tuesday.



Topic

PE

Your PE lesson for today

https://www.youtube.com/watch?v=qo69ibo_QgQ&list=PLKhJdSKDkisYiuNWc3vyV33tFsz_uN4gX&index=1&safe=active