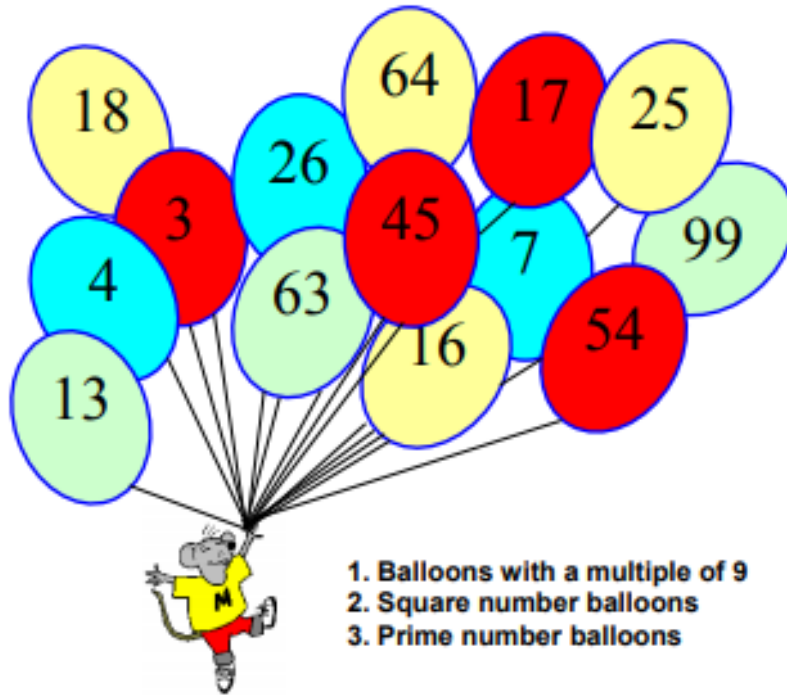




Puzzle time

Balloon bursting

If a number in one of the balloons is included in the answers to the four problems below then that balloon will fly away.



WHICH BALLOON IS LEFT?



Puzzle time

Balloon bursting - answer.

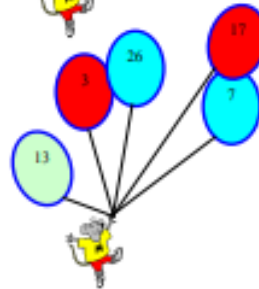
1. Balloons with a multiple of 9

As you know the digits of a multiple of 9 add up to 9 so that takes away 18, 45, 54, 63 and 99



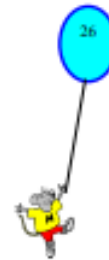
2. Square number balloons

The square numbers are:
4, 16, 25 and 64



2. Prime number balloons

A prime number is a whole number with only two factors.
The prime numbers are:
3, 7, 13, and 17



That leaves just 26.