





Steps to success

Lockdown work

Date	Wednesday 3rd March
Subject/s	Geography
Learning Objective 	To use 4 and 6 figure grid references.

SA 	TA 
---	---

Success Criteria 	I can explain why we have grid references.		
	I can locate features using grid references.		
	I can write the grid reference of features on a map.		
	Independent	Adult Support ()	Group Work

Key Vocabulary: Grid references Key Symbols Features Ordnance Survey

Swanage Map Four-Figure and Six-Figure Grid References



- 1) What is the purpose of grid references?
- 2) What is the difference between 4 and 6 figure grid references?
- 3) What are the four-figure grid references for the following locations on the map?
 - Swanage Pier
 - Durlston Country Park
 - Durlston Head
- 4) What are the six-figure grid references for the following locations on the map?
 - Swanage Railway Station
 - The Hospital
 - Peveril Point
- 5) What is located at each of these grid-references?
 - 013776
 - 016794
 - 018798

Challenge:
Why is having a map key important?